







**PROGRAM LINUS NKRA
INSTRUMEN LATIHAN NUMERASI TAHUN 3**




- 1 Match the animals with the correct numbers.
数一数，把动物的数量和正确的数字画线连起来。



-
- 2 Tick (✓) the correct Malaysian coin.
在马来西亚钱币下面画 (✓)。



- 3 Write the correct time.
写出正确的时间。



时

分

-
4. Complete the table.
完成下列图表。.

yesterday 昨天	today 今天	tomorrow 明天
Monday 星期一	Tuesday 星期二	




Friday
星期五

Wednesday
星期三

5 Subtract.
減減看。

$$\begin{array}{r} 57 \\ - 25 \\ \hline \end{array}$$

6 Multiply.
乘一乘。

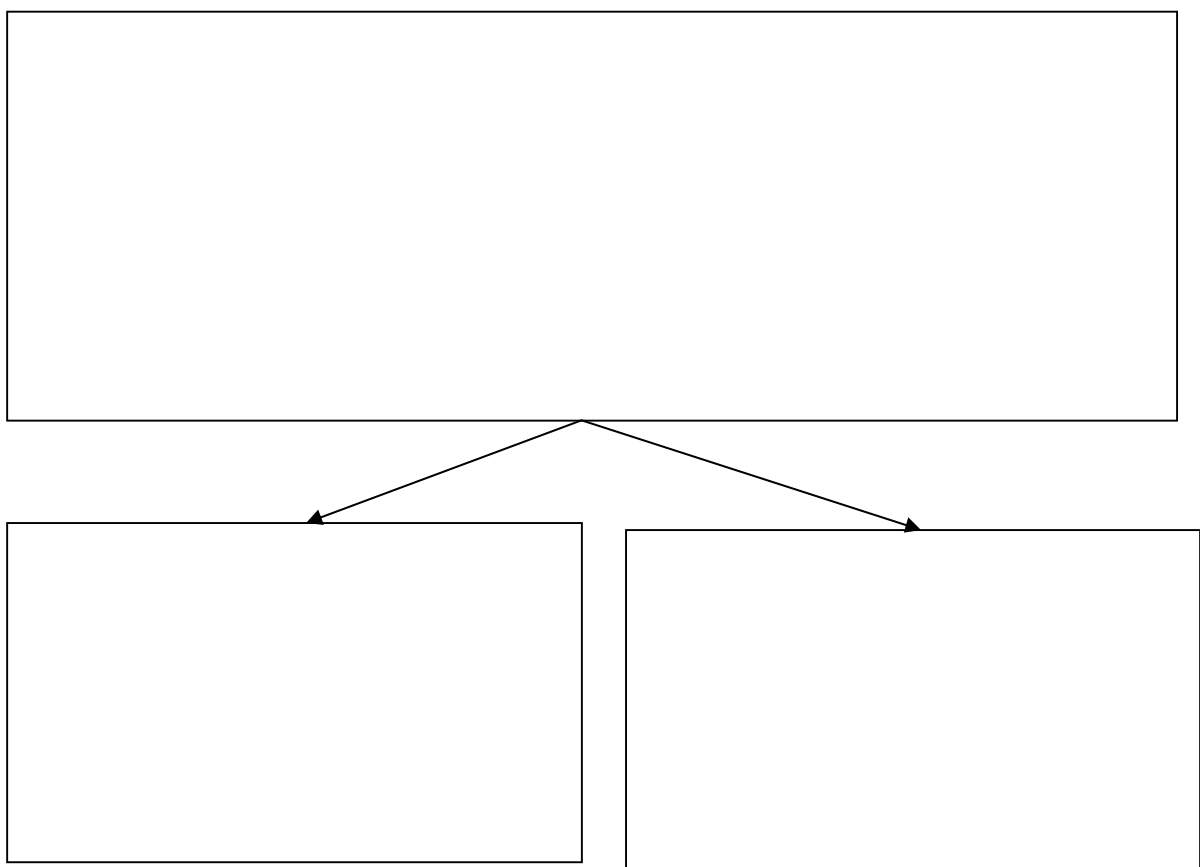


$$\begin{array}{r} 3 \\ \times 6 \\ \hline \end{array}$$

- 7 Add.
加加看。

$$\begin{array}{r} 15 \\ +14 \\ \hline \hline \end{array}$$

- 8 Divide.
除一除。

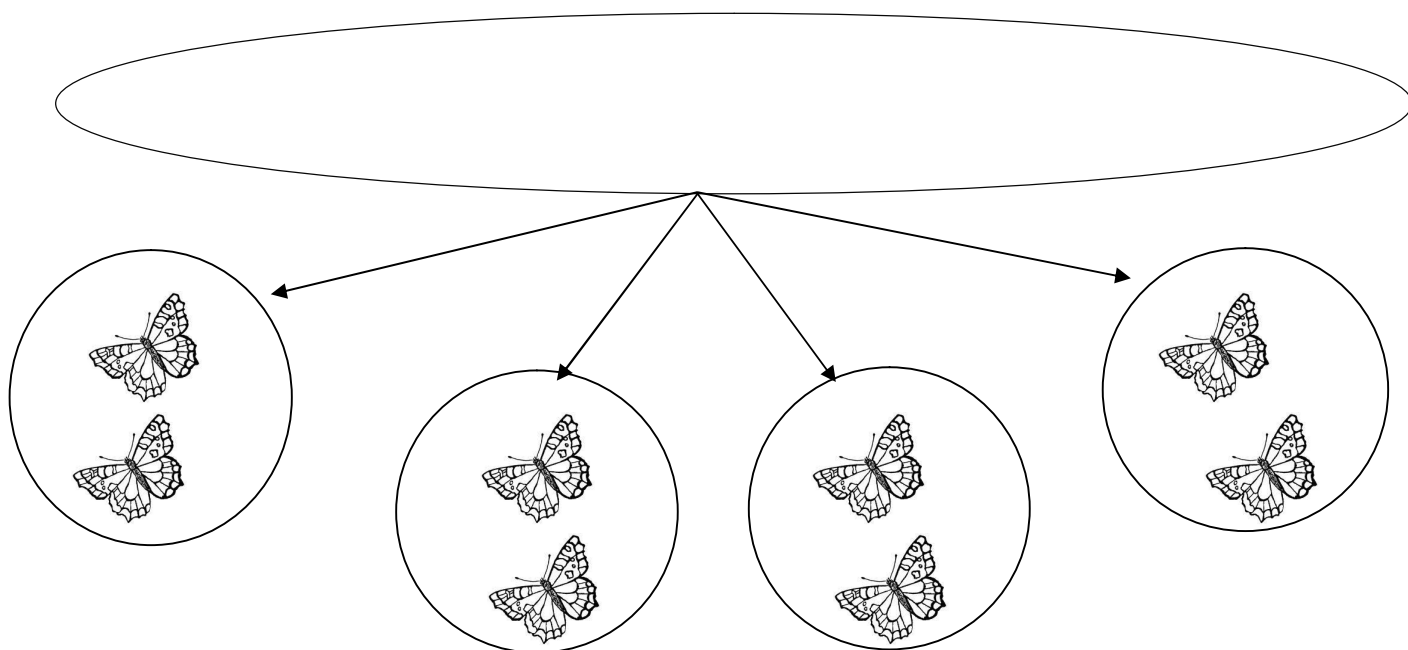


$$16 \div 2 = \square$$

9 Multiply.
乘一乘。

$$2 \times 10 =$$

10 Divide.
除一除。



$$8 \div 4 =$$

1 1 A ruler cost 80 sen. An eraser cost 30 sen.

Find the difference.

一把尺的价钱是 80 仙，一个橡皮擦的价钱是 30 仙。

请找出这两件文具价钱的差别。

$$\begin{array}{r} 80 \text{ sen} \\ - 30 \text{ sen} \\ \hline \end{array}$$

1 2 Write the correct amount of money.

写出钱币的总值。



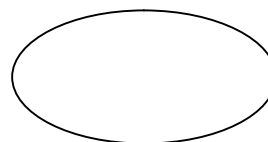
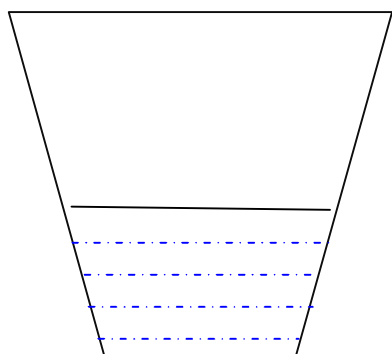
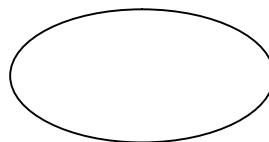
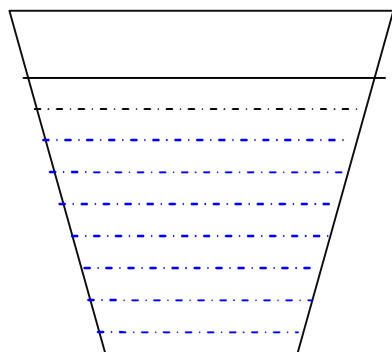
dan



$$\text{RM } 50 + \text{RM } 1 = \text{RM }$$

1 3 Tick (✓) at the less volume.

在比较少水的容器的右边空格里画 (✓)。



- 1 4 Rafidah has 5 shirts. Her sister has 3 shirts.
How many shirts do they have ?

拉费达有 5 件衣服，她的妹妹有 3 件衣服。
她们一共有几件衣服？

$$5 \square 3 = \square$$

-
- 1 5 Hafiz has 20 sweets.
He divides equally to 5 people.
How many sweets does every people get ?

哈彼有 20 颗糖果。
他把糖果平分给 5 个人。

每人各得几颗？

$$20 \square 5 = \square$$

- 1 6 Rani has 37 books.
He gives 16 books to his sister.

How many books left?

拉尼有 37 本书。
他给了他的弟弟 16 本。

请问他还剩下几本书？

-
- 1 7 Mr. Tan buys 4 motorcycles.
Each motorcycle has 2 wheels.

How many wheels for 4 motorcycles?

陈先生买了 4 辆电单车。
每辆电单车有 2 个轮胎。

4 辆电单车共有几个轮胎？

--

- 1 8 Tina has RM9.
Zahid has RM4.

How much money do they have?

叮娜有 RM9.

查益有 RM4.

他们共有多少钱?

-
- 1 9 Maya takes 17 minutes to school while Amir takes
6 minutes.

Find the difference.

麦雅需花 17 分钟到学而阿明则只花 6 分钟。

找出相差的时间。

- 20 Wong's mass is 27 kg. Sally's mass is 32 kg.
Find their total mass?

王晓明的体重是 27 kg. 莎莉的体重是 32 kg.
他们的体重共是多少 kg?

